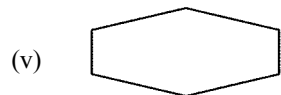
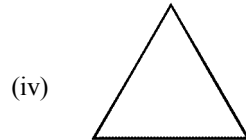

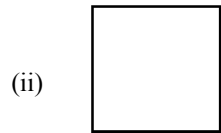


Time: 10 Minutes	Paper Math 3	Total Marks: 10
-------------------------	---------------------	------------------------

6th Month, 2nd Week, 1st Day	Syllabus: Unit 6. Exercise # 3. Q # 1.
------------------------------	---

Q.1. Draw the symmetry in the following figures. (10)

درج ذیل اشکال کے خط متساوی کھینچیں۔



Time: 10 Minutes	Paper Math 3	Total Marks: 10
-------------------------	---------------------	------------------------

6th Month, 2nd Week, 1st Day	Syllabus: Unit 6. Exercise # 3. Q # 1.
------------------------------	---

Q.1. Draw the symmetry in the following figures. (10)

درج ذیل اشکال کے خط متساوی کھینچیں۔

